

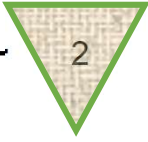










Name: _____ Date: _____ Period: _____

Subject: _____ Grade: _____

ISN Activity #1

A. How do you write the following fractions in standard division form?

fraction	ice cream	cone	standard division
1 			$1 \div 2$
2 $\frac{3}{4}$			\div
3 $\frac{2}{5}$			\div
4 $\frac{3}{8}$			\div
5 $\frac{1}{4}$			\div

B. Write the following Whole Numbers as fractions:

6 $7 = \frac{7}{1}$

7 $9 = \underline{\hspace{1cm}}$

8 $13 = \underline{\hspace{1cm}}$

9 $42 = \underline{\hspace{1cm}}$

10 $5 = \underline{\hspace{1cm}}$